





PADOMĀ!


1. uzdevums

Kura no figūrām visvairāk atšķiras
no citām? Kāpēc Tu tā domā?



1. uzdevuma atbilde

**Piemēram, nesatur nevienu
taisnu līniju!**



2. uzdevums

Dažu minūšu laikā, atrodi 13 kļūdas!

-
- $3 + 12 = 15$ $15 - 8 = 7$ $16 + 4 = 22$ $13 - 3 = 10$ $13 - 4 = 9$
 - $16 - 9 = 7$ $16 + 9 = 28$ $13 - 2 = 11$ $19 + 5 = 24$ $15 - 4 = 11$
 - $15 - 2 = 13$ $15 + 9 = 24$ $15 + 5 = 10$ $14 - 9 = 5$ $12 - 9 = 3$
 - $5 + 17 = 22$ $2 + 11 = 13$ $5 + 18 = 23$ $6 + 15 = 22$ $18 - 8 = 10$
 - $12 - 7 = 5$ $19 - 7 = 13$ $17 + 7 = 23$ $19 - 6 = 13$ $16 + 6 = 22$
 - $16 - 2 = 13$ $14 - 8 = 6$ $14 + 9 = 23$ $18 + 4 = 22$ $18 - 4 = 12$
 - $14 + 8 = 22$ $9 + 12 = 21$ $16 + 8 = 23$ $12 - 6 = 6$ $12 - 4 = 16$
 - $7 + 18 = 25$ $16 - 5 = 11$ $5 + 3 = 18$ $13 - 5 = 18$ $23 - 9 = 13$

2. uzdevuma atbilde

-
- $3 + 12 = 15$ $15 - 8 = 7$ **$16 + 4 = 22$** $13 - 3 = 10$ $13 - 4 = 9$
 - $16 - 9 = 7$ **$16 + 9 = 28$** $13 - 2 = 11$ $19 + 5 = 24$ $15 - 4 = 11$
 - $15 - 2 = 13$ $15 + 9 = 24$ **$15 + 5 = 10$** $14 - 9 = 5$ $12 - 9 = 3$
 - $5 + 17 = 22$ $2 + 11 = 13$ $5 + 18 = 23$ **$6 + 15 = 22$** $18 - 8 = 10$
 - $12 - 7 = 5$ **$19 - 7 = 13$** **$17 + 7 = 23$** $19 - 6 = 13$ $16 + 6 = 22$
 - **$16 - 2 = 13$** $14 - 8 = 6$ $14 + 9 = 23$ $18 + 4 = 22$ **$18 - 4 = 12$**
 - $14 + 8 = 22$ $9 + 12 = 21$ **$16 + 8 = 23$** $12 - 6 = 6$ **$12 - 4 = 16$**
 - $7 + 18 = 25$ $16 - 5 = 11$ **$5 + 3 = 18$** **$13 - 5 = 18$** **$23 - 9 = 13$**

3. uzdevums

Metamā kauliņa burvestība pastāv tā
iemesla dēļ, ka ik divu pretējo skaldņu punktiņu summa ir 7.
Pasaki, kāda ir visu kauliņu neredzamo skaldņu punktiņu
summa!



3. uzdevuma atbilde

36

4. uzdevums Atšifrē uzrakstīto!

$$\bar{\text{I}} \quad x : 3 = 422$$

$$\text{S} \quad 3421 - x = 2154$$

$$\text{M} \quad x : 3 = 1266$$

$$\text{U} \quad x : 3 = 1275$$

$$\text{B} \quad x + 2 = 1256$$

$$\text{D} \quad x + 2163 = 3419$$

$$\text{T} \quad 3x = 1257$$

$$\bar{\text{A}} \quad 90006 : x = 3$$

$$\text{R} \quad 3421 - x = 2164$$

$$\text{J} \quad x - 3421 = 5585$$

$$\text{K} \quad x - 2163 = 3419$$

$$\text{A} \quad x - 1256 = 2$$

1256	1258	1257	1254	1267
------	------	------	------	------


1256	1258	1257	1258	
------	------	------	------	--

1256	1258	1257	1266	419	30002	9006	3825
------	------	------	------	-----	-------	------	------

4. uzdevuma atbilde

Darbs dara darītāju
(lieki: burti M, K)

5. uzdevums



Kaķis, kura kustības ātrums $700\text{m}/\text{min}$, uzsāk peles ķeršanu, kura mūk no viņa ar ātrumu $200\text{m}/\text{min}$.

Pēc cik ilga laika kaķis noķers peli, ja, uzsākot ķert peli, starp viņiem ir 50m ?

5. uzdevuma atbilde

6 sekundēm

PALDIES!